

Teacher & Section: _____

SUNSHINE MATH - 1

Venus, I

First & Last Name: _____

**All work must show your own thinking!
Remember to staple the pages together!

★★ 1. Sasha needs



She has .

How many more must she get?


Answer: _____ 

★

2. Five little  flying high.

Seven more come to sit nearby.

How many  in all?

Answer: _____  in all

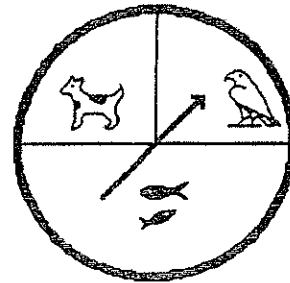
★★★ 3. Amanda reads 2 books a week.

How many books does she read
in 6 weeks?

Answer: _____ books




- ★★ 4. Julio will use the spinner to find out what pet his parents will buy. Which pet will he probably get?




Circle the answer.

dog bird fish

- ★★ 5. Make a graph to show the birthdays. Draw a ☺ for each child.

September: 

October: 

November: 

Fall Birthdays

September

October

November

- ★ 6. Draw the picture that comes next:

