

Teacher & Section: _____

SUNSHINE MATH - 1


Venus, II

First & Last Name: _____

**All work must show your own thinking!*

**Remember to staple the pages together!*

- ★★ 1. Which piece below will make half of this shape?



A.

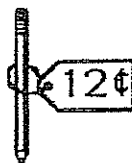
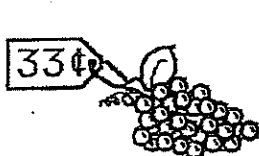


B.



C.

- ★★ 2. You spent exactly 33¢. Circle the two things that you bought.



- ★ 3. Which tile has a different number of dots than the other tiles? Circle the one that is different.

