


Teacher & Section: _____

SUNSHINE MATH - 2
Earth, III

First & Last Name: _____

**All work must show your own thinking!
Remember to staple the pages together!

- ★★★ 1. How many apples are in the paper bag? You may use counters to help. (The bag itself does not weigh anything.)



Answer: _____ apples

- ★ 2. What number goes in the missing place?

$$17 - \text{[shaded area]} = 9$$

Answer: _____

- ★★★ 3. a. How many more games did the Hornets win than the Eagle

Softball Games Won

Hornets	⊙ ⊙ ⊙ ⊙ ⊙ ⊙ ⊙
Pirates	⊙ ⊙ ⊙ ⊙ ⊙ ⊙
Eagles	⊙ ⊙ ⊙
Bears	⊙ ⊙

⊙ = 1 game

- b. Which team won exactly 2 games more than another team?

- c. Even out the 12 wins so that each team has the same number of wins as the other teams. How many wins would each team have?

★★★ 4. Put the right number in each box to make true statements. Use a calculator if you need to.

a. $67 - \square = 23$ b. $28 + \square = 60$ c. $\square - 16 = 36$


★★ 5. You want to buy a jar of Apple Butter. How much will the Apple Butter cost if you use this coupon?



-COUPON-
Save 25¢ OFF
Apple Butter


Answer: _____

★★★ 6. There are nine markers in one box. If you had to give one marker to each of the 29 students in your class, how many boxes would you have to buy?



Answer: _____ boxes

★★★★ 7. All insects have 6 legs, and all frogs have 4 legs. If Joey caught 2 insects and 3 frogs, how many legs would there be on all those creatures?



Answer: _____ legs