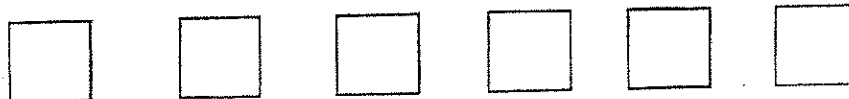


SUNSHINE MATH - K
Mercury, 2


★ 1. First & Last Name: _____
*All work must show your own thinking!
*Remember to staple the pages together!

(E)

★★ 2. Color in every other square:



★★ 3. How many cats are there?






★★★ 4. If you gave a friend 2 cookies, and he ate 1 cookie, how many cookies would he have left?



★★★ 5. How many sides does this square have? _____
How many sides does this triangle have? _____
How many sides does this rectangle have? _____



★★★ 6. How many noses are there? _____
How many ears are there? _____
How many legs are there? _____



(Parents: Reading the problem to your child is ALWAYS okay. If you help them solve the problems, please initial the problem and they will receive partial credit.)