

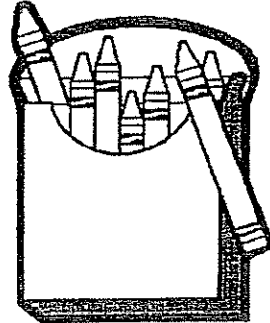
Teacher & Section: _____

SUNSHINE MATH - K
Mercury, 3


★ 1. First & Last Name: _____ (AME)

**All work must show your own thinking!
Remember to staple the pages together!

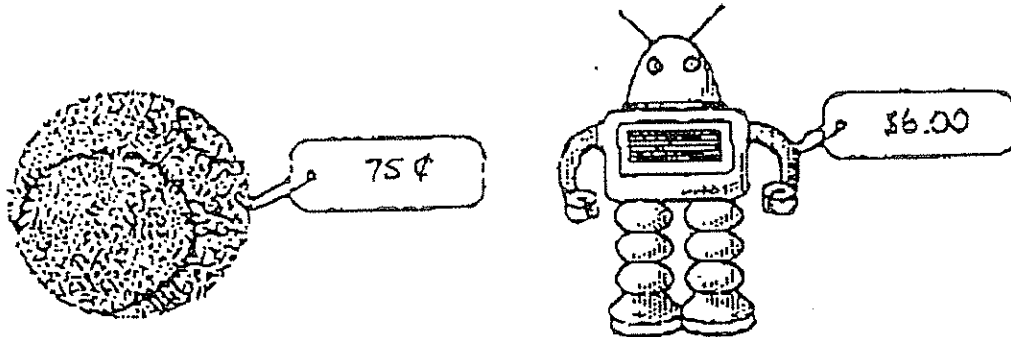
★ 2. How many crayons? _____



★★ 3. Copy the pattern exactly.




★★★ 4. Color in the toy that costs more money.



★★★ 5. How many balls are inside the box? _____

How many balls are outside the box? _____


How many balls are there total? _____



★★★★ 6. How many stars are there? _____

How many moons are there? _____

How many suns, moons, and stars together? _____



(Parents: Reading the problem to your child is ALWAYS okay. If you help them solve the problems, please initial the problem and they will receive partial credit.)