

SUNSHINE MATH - K  
Mercury, 4


★ 1.

First & Last Name: \_\_\_\_\_ (AME)

*\*All work must show your own thinking!*

*\*Remember to staple the pages together!*

★★★ 2. Color 6 squares blue and 6 squares red. How many are left that are not colored?



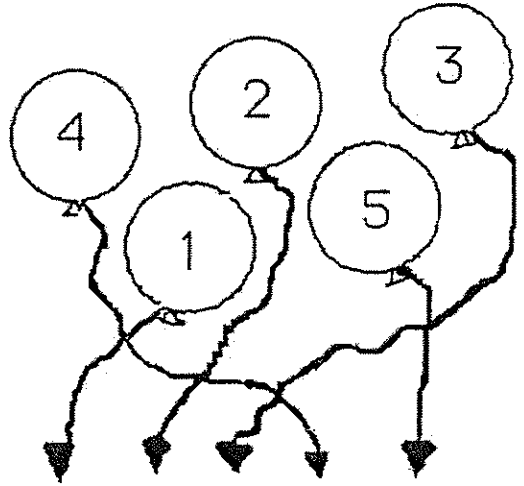
★ 3. Circle 2 dots below: Circle 5 dots below:



★★ 4. Draw the last two missing pattern pieces.



★★ 5. Follow the string and write the number on the line.




\_\_\_\_\_

★★★★ 6. How many dogs are there? \_\_\_\_\_

How many legs do you see? \_\_\_\_\_

How many tails are there? \_\_\_\_\_

How many eyes do these two dogs have? \_\_\_\_\_



(Parents: Reading the problem to your child is ALWAYS okay. If you help them solve the problems, please initial the problem and they will receive partial credit.)