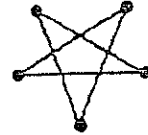


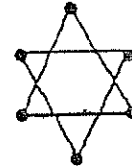
SUNSHINE MATH - K
Mercury, 5

★ ¹ First & Last Name: _____
 *All work must show your own thinking!
 *Remember to staple the pages together! (ME)

★★ 2. How many points are on this star? _____



How many points are on this star? _____



★ 3. Color the star above that has more points.

★★★★ 4.

○	○	○	○	○	○				
☆	☆								
□	□	□	□	□	□	□			

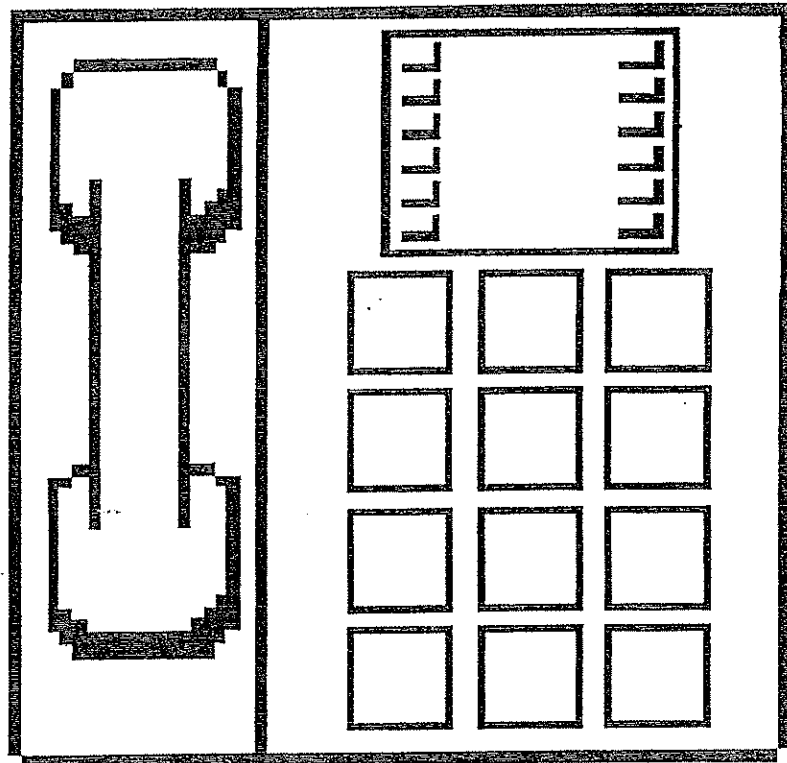
How many circles (○) are there? _____

How many squares (□) are there? _____

How many stars (☆) are there? _____

Put a ✓ for each year old you are, in the bottom row.

★★★ 5. Look at a telephone. Put numbers on the buttons below.



★★ 6. Draw a line from the problem to the correct answer.

5 4 3

$\begin{matrix} \bullet & + & \bullet & = & ? \\ \bullet & & \bullet & & \end{matrix}$

 $\begin{matrix} \bullet & + & \bullet & = & ? \\ \bullet & & \bullet & & \end{matrix}$

$\begin{matrix} \bullet & + & \bullet & = & ? \\ \bullet & & \bullet & & \end{matrix}$

(Parents: Reading the problem to your child is ALWAYS okay. If you help them solve the problems, please initial the problem and they will receive partial credit.)