

Teacher & Section: _____

SUNSHINE MATH - K
Mercury, 8

★ 1.

First & Last Name: _____ (NAME)

**All work must show your own thinking!*

**Remember to staple the pages together!*

★★ 2. Write in the numbers from 1 to 10.

★ 3. Efrem is 7 years old.

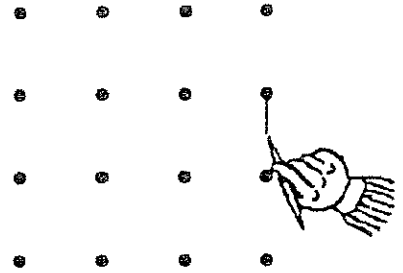
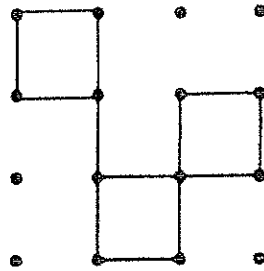
Stephanie is 9 years old.

Who is older?

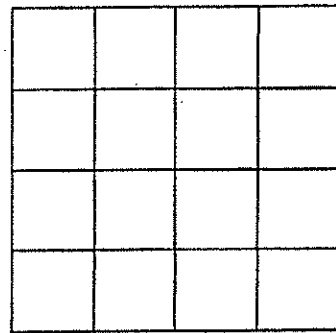
Put a ✓ in the box.




★★★★ 4. Copy this pattern.....over to here.



★★★ 5. Color 4 squares that touch each other to make 1 big square.



★★★★ 6. Color 6 squares that touch each other to make a rectangle.



(Parents: Reading the problem to your child is ALWAYS okay. If you help them solve the problems, please initial the problem and they will receive partial credit.)