

SUNSHINE MATH - K  
Mercury, 9

★ 1.

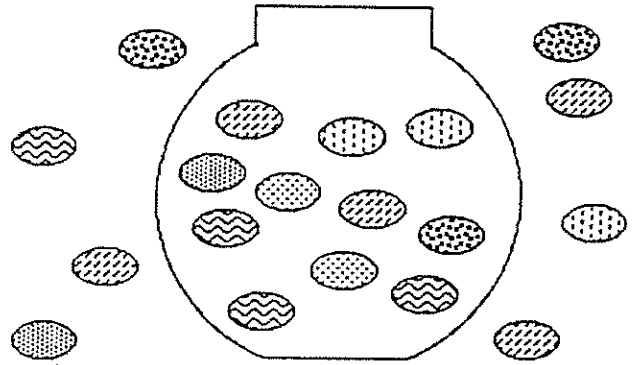
First & Last Name: \_\_\_\_\_ (NAME)

*\*All work must show your own thinking!*

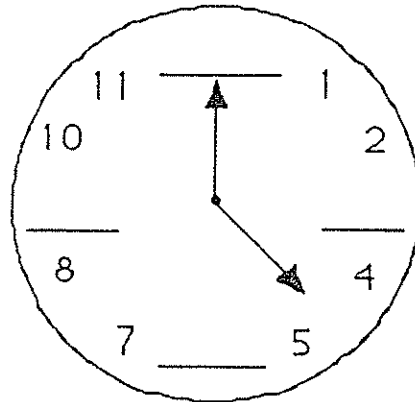
*\*Remember to staple the pages together!*

★ 2. How many jellybeans are in the bowl?

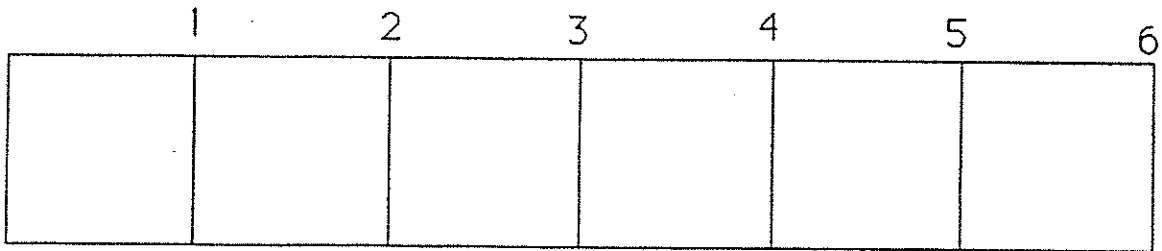
\_\_\_\_\_



★ 3. Fill in the missing numbers on this clock.



★★ 4. Color in a segment that is 4 inches long. (Each square is 1 inch long.)



★★★★ 5. How many letters are there in the alphabet? \_\_\_\_\_

A	B	C	D	E	F	G	H	I
J	K	L	M	N	O	P	Q	R
S	T	U	V	W	X	Y	Z	

★★★★ 6. Circle Sunday, June 14.

JUNE 1998						
S Sunday	M Monday	Tu Tuesday	W Wednesday	Th Thursday	F Friday	S Saturday
	1	2	3	4	5	6
7	8	9	10	11	12	13
14	15	16	17	18	19	20
21	22	23	24	25	26	27
28	29	30				

(Parents: Reading the problem to your child is ALWAYS okay. If you help them solve the problems, please initial the problem and they will receive partial credit.)